

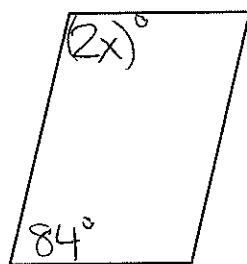
# Foundations of Geometry

Name: \_\_\_\_\_

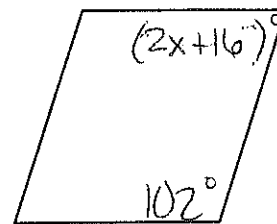
Date: \_\_\_\_\_

Solve for  $x$  in each parallelogram.

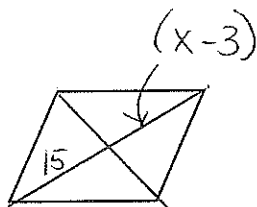
1.



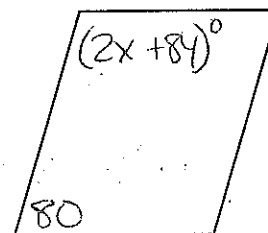
2.



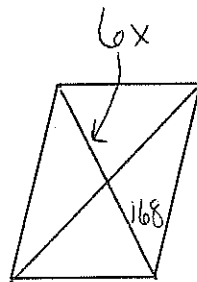
3.



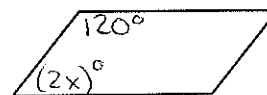
4.



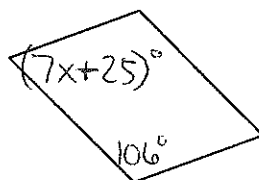
5.



6.



7.



8.

